





Make Amounts with Coins #1

Find different ways of making amount with coins.





Name _____

				
19¢		1	1	4
19¢				
26¢				
26¢				
26¢				
34¢				
34¢				
34¢				
34¢				
57¢				
57¢				
57¢				
99¢				
99¢				
99¢				
99¢				

©EnchantedLearning.com

Make Amounts with Coins #1 - Sample Answers

Find different ways of making amount with coins.

				
19¢		1	1	4
19¢			3	4
26¢	1			1
26¢		2	1	1
26¢			4	6
34¢	1		1	4
34¢		3		4
34¢		2	2	4
34¢		1	3	9
57¢	2		1	2
57¢	1	3		2
57¢	1	2	2	2
99¢	3	2		4
99¢	3	1	2	4
99¢	3		4	4
99¢	2	4	1	4

©EnchantedLearning.com